

Unit 3

Pre-test - Page 1

Name: _____

Date: _____

1. Write a number to sequence the steps to doing laundry:

_____ Put clothes in washer, add detergent, and start washer.

_____ Put clothes away in closet and drawers.

_____ Sort the dark and light clothing to wash separately.

_____ Put clothes in dryer and start dryer.

2. Draw a line from each clothing item to "hang up" or "fold"

fold

dress

t-shirt

socks

underwear

dress shirt

sweatshirt

pajamas

jacket

**hang
up**

3. Circle True or False for each statement:

Detergent goes in the dryer.

True

False

The washing machine gets clothes dry.

True

False

You must fold the clothes before you put them in the washing machine.

True

False

It is best to separate the laundry into dark and light colors before washing.

True

False

Unit 3

Pre-test - Page 2







Name: _____

Date: _____

4. Match the weather and temperatures:

hot	40° - 0°
cold	85° - 65°
warm	110° - 85°
cool	65° - 40°

5. Circle the correct time to wear the pictured clothing:

 cool hot	 cold warm	 hot cold
 90° 40°	 30° 80°	 20° 70°

Unit 3

Post-test - Page 1

Name: _____

Date: _____

1. Write a number to sequence the steps to doing laundry:

_____ Put clothes in washer, add detergent, and start washer.

_____ Put clothes away in closet and drawers.

_____ Sort the dark and light clothing to wash separately.

_____ Put clothes in dryer and start dryer.

2. Draw a line from each clothing item to "hang up" or "fold"

fold

dress

t-shirt

socks

underwear

dress shirt

sweatshirt

pajamas

jacket

**hang
up**

3. Circle True or False for each statement:

Detergent goes in the dryer.

True

False

The washing machine gets clothes dry.

True

False

You must fold the clothes before you put them in the washing machine.

True

False

It is best to separate the laundry into dark and light colors before washing.

True

False

Unit 3

Post-test - Page 2






Name: _____

Date: _____

4. Match the weather and temperatures:

hot	40° - 0°
cold	85° - 65°
warm	110° - 85°
cool	65° - 40°

5. Circle the correct time to wear the pictured clothing:

 cool hot	 cold warm	 hot cold
 90° 40°	 30° 80°	 20° 70°